


MAE 3 Extra Credit Assignment


The following sketching assignment is for Extra Credit.

Instructions: In the accompanying box draw the ISOMETRIC view of the objects below such that it exactly generates the given views. There are no hidden lines within the objects. There may be more than one valid solution.

Brain Teaser 1:



Top View

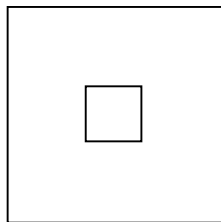


Side View

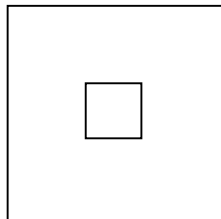


Isometric View

Brain Teaser 2:



Top View



Side View



Isometric View